

Dear Soon to be First Graders,

We are so **glad** you are ready for first grade. We have seen how hard you have worked this year and all the fun you have had learning many things. We are excited to have you join our classes this next year.


To help you have a fun summer and keep learning, we are giving you a special project— a reading **BINGO** board. We want you to see if you can make **one, two, or three Bingos**. Can you even fill out the whole and get a **black-out**? All you need to do is have someone read a book with you (or read a book yourself) and then mark off a space on the board. You can use crayons, markers, or even stickers to cover a space. You can use your own books or take a trip to the library. On the back of this paper is a list of topics that we will be studying In first grade. There is also a list of many authors of books that we enjoy. You may use this to help you find some great books.

Moms and Dads, you can help your student by reading with them and finding a reward or fun thing to do for each Bingo. Bring your board with you to **Meet the Teacher Day in August** for a **special prize**. **Do not forget** to complete the back of the board about your favorite book and fill out the reading fog.

Loving learning,

First Grade Teachers





Summer Reading Bingo Board

<p>Read in the bathtub (no water, just blankets and pillows).</p> 	<p>Read outside on a blanket.</p> 	<p>Read while eating a snow cone (carefully).</p> 	<p>Read to your pet.</p> 	<p>Have a reading partying with friends and treats.</p> 
<p>Read on a Sunday.</p> 	<p>Read a book you love again.</p> 	<p>Read in a tent.</p> 	<p>Read to someone who cannot read.</p> 	<p>Read with a flashlight.</p> 
<p>Read a book you loved before you could read.</p> 	<p>Read for 15 minutes.</p> 	<p>Free Space</p>	<p>Read on a swing.</p> 	<p>Read under the kitchen table.</p> 
<p>Read using a silly voice.</p> 	<p>Read in the car.</p> 	<p>Read a poem.</p> 	<p>Read in your closet.</p> 	<p>Read on a Thursday.</p> 
<p>Swap favorite books with a friend and read.</p> 	<p>Read while eating a picnic lunch.</p> 	<p>Read in your bed.</p> 	<p>Read at the library.</p> 	<p>Read at 6:00 p.m.</p> 

Color or **place** a sticker over each square as you complete that square. Can you make a **BINGO**? **Complete** the **back** of this board about your favorite book that you read or was read to you this summer. You may **draw pictures**, **write words**, or both. Bring the board with you to our **Meet the Teacher Day in August** for a **special prize** for a special prize from your first grade teacher.

Draw a picture or **write words** to fill in the chart.

Title of your book: _____

Characters (<i>Who is in the story?</i>)	Setting (<i>Where does the story take place?</i>)
What was your favorite part?	


1st Grade Summer Reading List

Topics


- ❖ Animals
- ❖ Magnets
- ❖ Rocks
- ❖ Weather
- ❖ Plants

Favorite Authors

- ❖ Mercer Mayer
- ❖ James Marshall
- ❖ Cynthia Rylant
- ❖ Frank Asch
- ❖ Eric Carle
- ❖ Dr. Seuss
- ❖ Ezra Jack Keats
- ❖ H.A. Rey (Hans)
(*Curious Georgs*)
- ❖ Pat Hutchins
- ❖ R. Hoban
- ❖ Don Freeman
- ❖ Margaret Wise Brown
- ❖ Audrey Wood
- ❖ Lois Elhert
- ❖ Arnold Lobel
- ❖ Jan Brett



Name: _____



Read each word.

it

at

is

map

tin

pit

sat

tap


Read each heart words.

the

I

a

is



Read each sentence. Color the star each time you read.

It is a map.



It is a tin.



It is a pit.



I sat at the pit.




I tap the map.



Name: _____

Read each word. Color the starfish based on whether the word ends in -am or -an.



an

am

man

pan


fan

Sam

Pam

tan

man




Name: _____




Missing Sounds


Fill in the missing sounds.




d		p
---	--	---




d		t
---	--	---




m		d
---	--	---




d		m
---	--	---




d		d
---	--	---




d		m
---	--	---



p		d
---	--	---




s		
---	--	--



p		
---	--	--

Name: _____



Read each word.

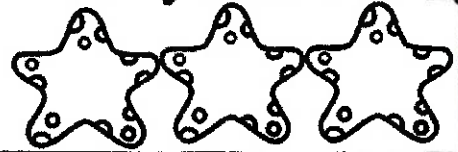
in	on	top	ban	big
bug	bin	bus	tub	sub

Read each heart words



Read each sentence. Color the star each time you read.


Ban the big bug.



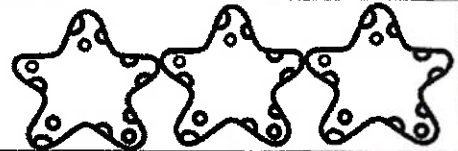
The bug is in the bin.



The bug is in the bus.



The bug is as big as a tub.

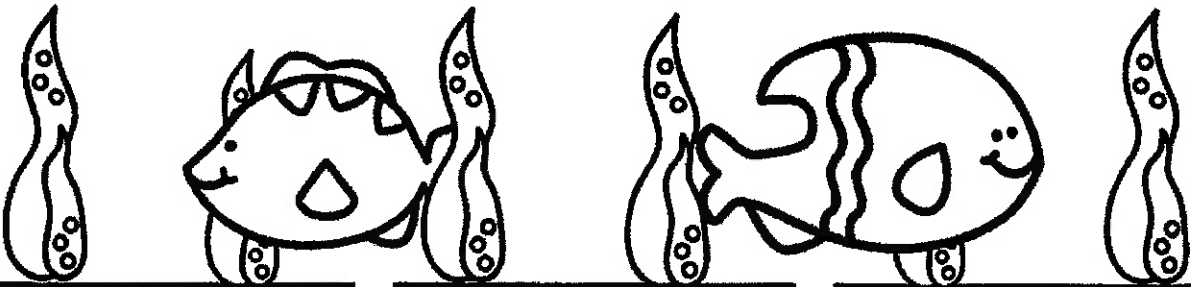



The bug is on top of the sub.

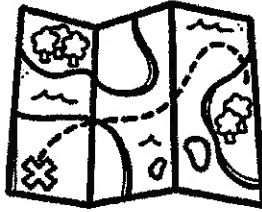



Name: _____


Color the correct word that applies to the picture.





	
bat	bats


	
map	maps


	
bun	buns


	
dog	dogs

	
net	nets

	
cop	cops


	
cap	caps

	
tot	tots

	
bed	beds

Name: _____

26
27



Read each word.

am	in	on	lab	last	lent
lab	got	help	fled	land	belt

Read each heart words



Read each sentence. Color the star each time you read.

I am in the lab.



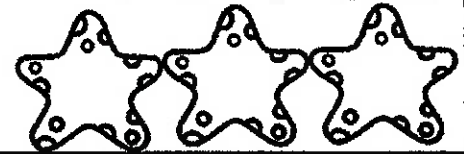
I am last in the lab.



I got help in the lab.



I fled on land.



He lent me a belt.









35a

Name: _____

Write the CVC short a words that match the picture.

Word Bank

pal dab sad mad lab dab cat yak tax


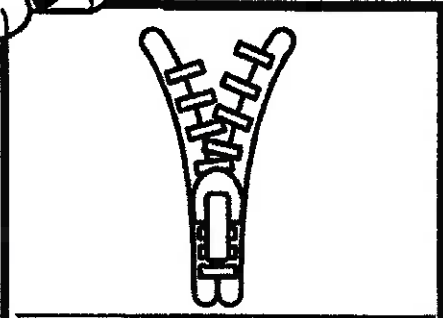




Name: _____

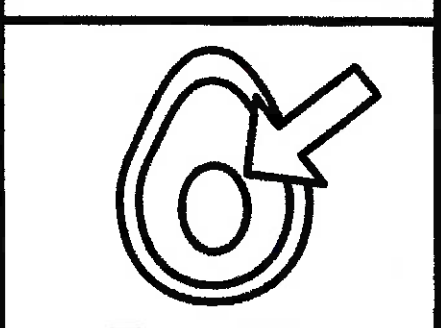


Write the CVC short i words that match the picture.

Word Bank


dim pit zip lid jig sit hip zip pig







37a




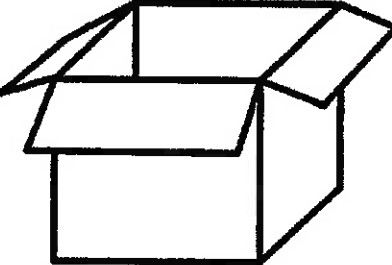





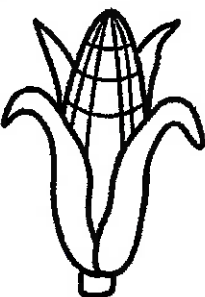

Name: _____

Write the CVC short o words that match the picture.


Word Bank

hop cob mom dot cog pox pod log box



 _____	 _____	 _____
 _____	 _____	 _____
 _____	 _____	 _____

39a

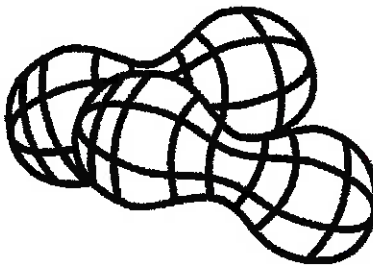


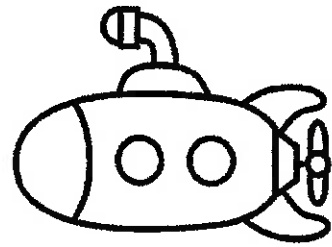



Name: _____


Write the CVC short u words that match the picture.

Word Bank

tux bud bug bus hut sub nun gum nut



40a







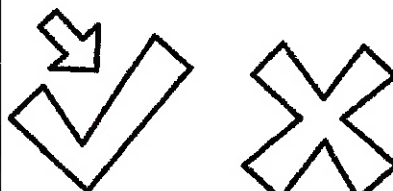




Name: _____

Write the CVC short e words that match the picture.

Word Bank

hen led net gem yes pep web keg wed



 _____	 _____	 _____
 _____	 _____	 _____
 _____	 _____	 _____

Name: _____

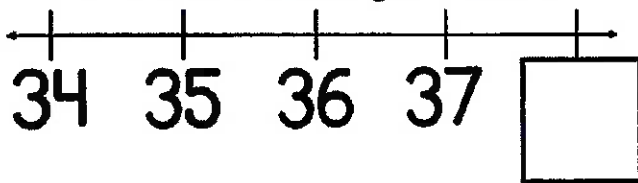
Weekly Math Review - Q4:2

Week of: _____

Monday

Draw a shape with 4 equal sides.

Fill in the missing numbers.



Which group has more?



Emma has 10 beads on her necklace. 4 of them fell off. How many beads are left?

Add the numbers.

$$2 + 3 = \underline{\quad}$$

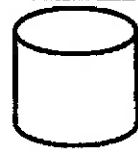
$$1 + 3 = \underline{\quad}$$

Which shoe is longer?




Tuesday

Name the shape.



How many?



Circle the correct words.

3 is greater than **3**
is less than
is equal to

Draw enough dots to make 10.

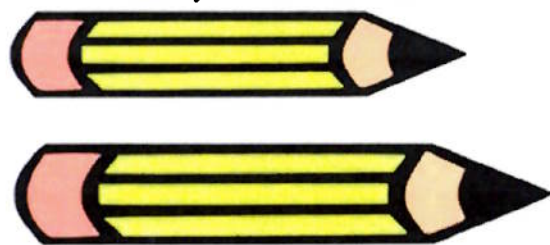



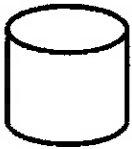
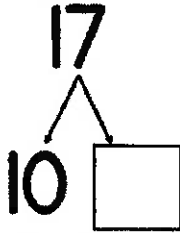




Subtract the numbers.

$$4 - 3 = \underline{\quad}$$

$$1 - 1 = \underline{\quad}$$

Which pencil is shorter?



Wednesday	Thursday
<p>Color all the shapes that are rectangles.</p> 	<p>Is the shape flat or solid?</p> 
<p>What two numbers make 17?</p> 	<p>Fill in the missing number?</p> $10 + \underline{\quad} = 11$
<p>Which group has less?</p> 	<p>Circle the correct words.</p> <p>4 is greater than 7 4 is less than 7 4 is equal to 7</p>
<p>Brian has 3 toy cars, and Emma has 4 toy cars. How many toy cars do they have altogether?</p>	<p>Draw enough dots to make 8 on each domino.</p> 
<p>Add the numbers.</p> $2 + 0 = \underline{\quad}$ $4 + 1 = \underline{\quad}$	<p>Subtract the numbers.</p> $3 - 2 = \underline{\quad}$ $4 - 2 = \underline{\quad}$
<p>Which tree is taller?</p> 	<p>Which child is shorter?</p> 

Name:

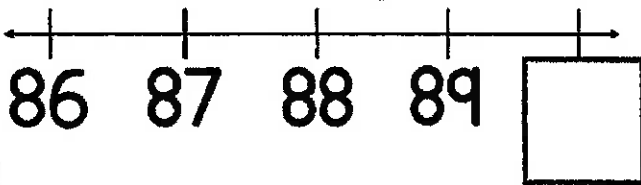
Weekly Math Review - Q4:3

Week of:

Monday

Draw a shape with 4 corners.

Fill in the missing numbers.



Which group has more?




There are 2 red birds and 3 green birds in a tree. How many birds are there altogether?

Which string is longer?

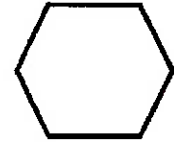


Which object is heavier?



Tuesday

Name the shape.



How many?



Circle the correct words.

9

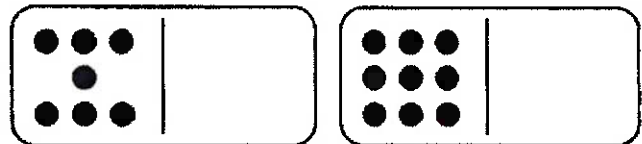
is greater than

is less than

is equal to

4

Draw enough dots to make 10.




Subtract the numbers.

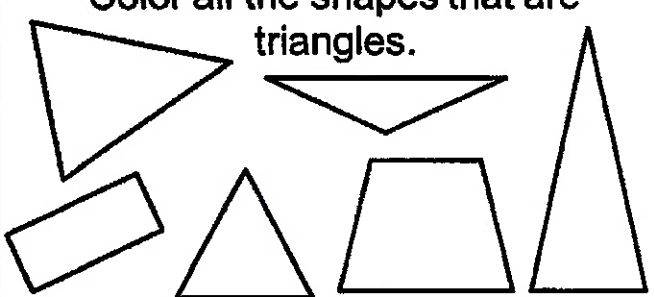

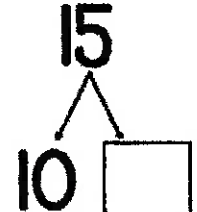





$$5 - 1 = \underline{\quad}$$

$$4 - 3 = \underline{\quad}$$

Which object is lighter?



Weekly Math Review - Q4:3

Wednesday	Thursday
<p>Color all the shapes that are triangles.</p> 	<p>Is the shape flat or solid?</p>  <hr/> <hr/>
<p>What two numbers make 15?</p> <p style="text-align: center;">15</p> 	<p>Fill in the missing number?</p> $10 + \underline{\quad} = 12$
<p>Which group has less?</p> 	<p>Circle the correct words.</p> <p style="text-align: center;">6 is greater than 6</p> <p style="text-align: center;"> is less than </p> <p style="text-align: center;"> is equal to </p>
<p>There are 7 blue birds in a tree. 5 of them flew away. How many birds are left in the tree?</p>	<p>Draw enough dots to make 5 on each domino.</p> 
<p>Which string is shorter?</p> 	<p>Add the numbers.</p> $1 + 4 = \underline{\quad}$ $2 + 3 = \underline{\quad}$
<p>Which object is heavier?</p> 	<p>Which object is lighter?</p> 

Name: _____

Weekly Math Review - Q4:4

Week of: _____

Monday

Draw a shape with 3 sides.

Which group has more?

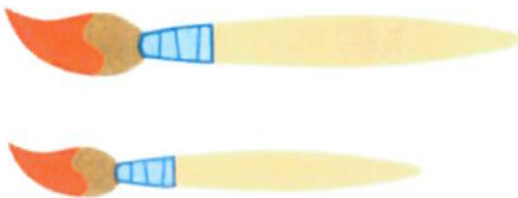


Jacob had a box of 8 crayons. He gave his friend 2 of his crayons. How many does he have left?


Which string is longer?



Which object is shorter?



Which object holds more?

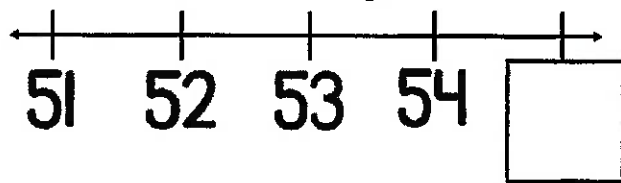


Tuesday

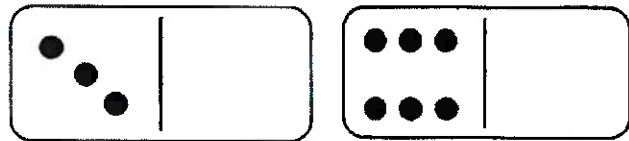
Name the shape.



Fill in the missing numbers.



Draw enough dots to make 10.



Subtract the numbers.

$$4 - 4 = \underline{\quad}$$

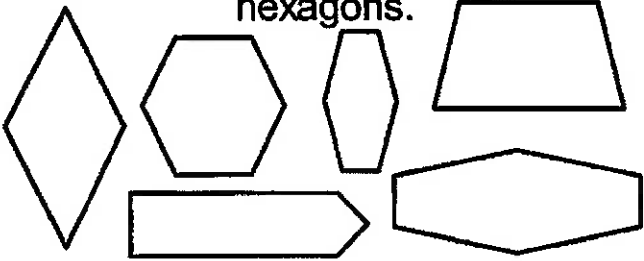
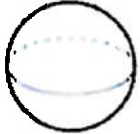
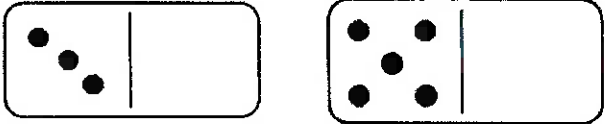





$$3 - 1 = \underline{\quad}$$

Which object is heavier?



Which object holds less?



Wednesday	Thursday
<p>Color all the shapes that are hexagons.</p> 	<p>Is the shape flat or solid?</p> 
<p>Fill in the missing number?</p> $10 + \underline{\quad\quad} = 18$	<p>Circle the correct words.</p> <p>4 is greater than 2 is less than is equal to</p>
<p>There are 3 white dogs, and 4 brown dogs at the park. How many dogs are there altogether?</p>	<p>Draw enough dots to make 7 on each domino.</p> 
<p>Which string is shorter?</p> 	<p>Add the numbers.</p> $3 + 1 = \underline{\quad}$ $4 + 0 = \underline{\quad}$
<p>Which object is taller?</p> 	<p>Which object is lighter?</p> 
<p>Which object holds more?</p> 	<p>Which object holds less?</p> 

Name: _____

Weekly Math Review - Q4:5

Week of: _____

Monday

Draw a shape with 6 sides.

Which group has less?



Katie got 4 grapes and 4 strawberries for her snack. How many pieces of fruit does she have in all?

Add the numbers.


$$0 + 3 = \underline{\quad}$$

$$2 + 3 = \underline{\quad}$$

Which object is longer?



Which object is heavier?

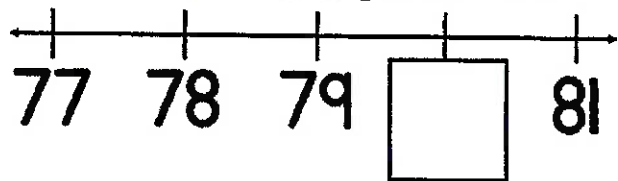


Tuesday

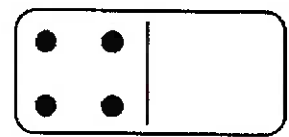
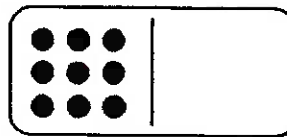
Name the shape.



Fill in the missing numbers.



Draw enough dots to make 10.



Subtract the numbers.


$$2 - 1 = \underline{\quad}$$

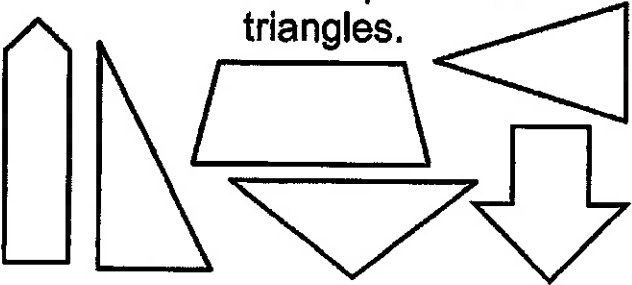

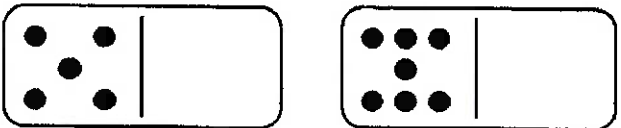




$$5 - 3 = \underline{\quad}$$

Which object is shorter?



Which object holds more?





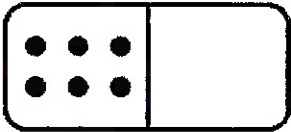







Wednesday	Thursday
<p>Color all the shapes that are triangles.</p> 	<p>Is the shape flat or solid?</p>  <hr/> <hr/>
<p>Fill in the missing number?</p> $10 + \underline{\quad\quad} = 16$	<p>Circle the correct words.</p> <p>8 is greater than 9 is less than is equal to</p>
<p>There are 9 pieces of paper. 4 of the pieces get thrown away. How many pieces of paper are left?</p>	<p>Draw enough dots to make 9 on each domino.</p> 
<p>Add the numbers.</p> $5 + 0 = \underline{\quad}$ $1 + 1 = \underline{\quad}$	<p>Subtract the numbers.</p> $3 - 3 = \underline{\quad}$ $4 - 3 = \underline{\quad}$
<p>Which object is shorter?</p> 	<p>Which object is taller?</p> 
<p>Which object is lighter?</p> 	<p>Which object holds less?</p> 

Name: _____

Weekly Math Review - Q1:1

Date: _____

Monday	Tuesday	Wednesday	Thursday
<p>How many apples do you see?</p> <p>_____</p> 	<p>How many cars do you see?</p> <p>_____</p> 	<p>How many stars do you see?</p> <p>_____</p> 	<p>How many pencils do you see?</p> <p>_____</p> 
<p>Circle the LARGEST number.</p> <p>2 7</p>	<p>Circle the SMALLEST number.</p> <p>6 5</p>	<p>Circle the LARGEST number.</p> <p>9 1</p>	<p>Circle the SMALLEST number.</p> <p>10 8</p>
<p>Draw enough dots to make 10.</p> 	<p>What two numbers make 10?</p> <p>5 + _____</p>	<p>Draw enough dots to make 10.</p> 	<p>What two numbers make 10?</p> <p>_____ + 2</p>
<p>Add the numbers.</p> <p>5 + 2 = _____</p>	<p>Add the butterflies.</p>  <p>_____</p>	<p>Subtract the numbers.</p> <p>6 - 3 = _____</p>	<p>Subtract the butterflies.</p>  <p>_____</p>
<p>Randy has 3 packs of gum. He buys 4 more. How many does he have now?</p> <p>_____ + _____ = _____</p>	<p>Mary had 8 grapes for her snack. She ate 4 of them. How many does she have left?</p> <p>_____ - _____ = _____</p>	<p>Ian planted 2 roses, and 4 daisies. How many flowers did he plant?</p> <p>_____ + _____ = _____</p>	<p>Katy baked 10 cookies. She gave 6 to her sisters. How many are left?</p> <p>_____ - _____ = _____</p>
<p>How many objects do you see?</p>  <p>_____</p>	<p>Fill in the missing number.</p> <p>20, 21, 22, _____, 24</p> <p>32, 33, _____, 35, 36</p>	<p>How many objects do you see?</p>  <p>_____</p>	<p>Fill in the missing number.</p> <p>48, 49, 50, _____, 52</p> <p>73, 74, _____, 76, 77</p>

1	2	3	4	5	6	7	8	9	10
11	12	13	14	15	16	17	18	19	20
21	22	23	24	25	26	27	28	29	30
31	32	33	34	35	36	37	38	39	40
41	42	43	44	45	46	47	48	49	50
51	52	53	54	55	56	57	58	59	60
61	62	63	64	65	66	67	68	69	70
71	72	73	74	75	76	77	78	79	80
81	82	83	84	85	86	87	88	89	90
91	92	93	94	95	96	97	98	99	100
101	102	103	104	105	106	107	108	109	110
111	112	113	114	115	116	117	118	119	120